



STARS OF THE WEEK

Class	Name	Reason
RB	Xavier L	Xavier has done a fantastic job adjusting to online learning and has completed nearly every activity assigned on Google Classroom this week. He is working independently and is showing lots of creativity as you can see from his Magic Potion. Keep up the amazing work Xavier!

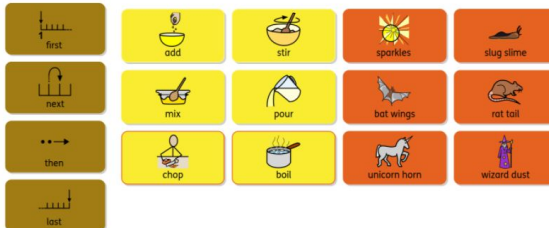
My Magic Potion



Method

In a big cauldron

1. First pour in a cup of bat's tears and a cup of slug slime.
2. Next add in a piece of the right bat wing.
3. Then mix in a small rat tail.
4. Finally chop in some unicorn horn and a sprinkle of wizard dust.
5. Let this boil for 30 minutes.




This magic potion will...make you strong and invincible

Ingredients List

- Bats tears
- Slug slime
- Right bat wing
- Small rat tail
- Unicorn horn
- Wizard dust

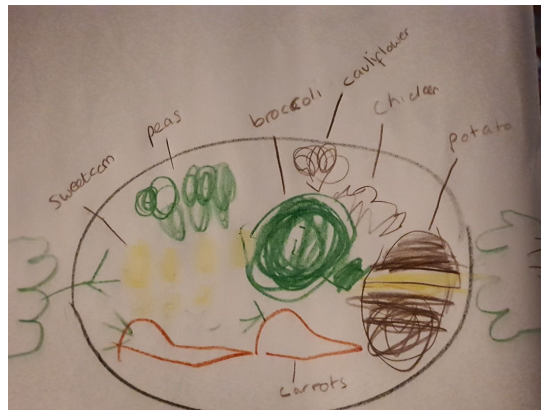
NUR	Ava W	Nursery star of the week is Ava for competing every online task and always completing them with great enthusiasm. Ava has been working hard on hearing initial sounds in words and has produced a lovely Winter themed picture.
-----	-------	---





STARS OF THE WEEK



Class	Name	Reason
RL	Freya M	Freya has been a superstar this week with her online learning. She has taken part in all the activities with a real passion. In particular her work on healthy eating was fantastic. Freya can explain exactly what healthy foods are and why it is important to eat a variety of food. Her picture of her roast dinner was exceptionally good which shows a range of food. Keep up the good work Freya!



RM	Shadeed I	Shadeed has amazed me with the effort he has put into completing his maths work at home. I was particularly impressed with his number formation which he practised in a tray of rice! Great job, Shadeed
----	-----------	--



RF	Oakley B	Oakley has been working exceptionally hard at home. He was able to confidently match a number of objects he found inside his home to the numerals that he picked (2,7,13 and 30) - Amazing job Oakley!
----	----------	--





STARS OF THE WEEK

Class	Name	Reason
1P	Jahanara A	Jahanara has worked extremely hard on our google classroom to complete every lesson. She has impressed all of her teachers with her dedication to her learning whilst at home. It is also lovely to see Jahanara commenting and chatting on our stream every day. Keep up the hard work Jahanara!



What is your name?
JJ

What is the title of your book?
Ancient Egypt

Who is the author?
Tom Fletcher


How many stars would you give it out of 5?
5

What is your favourite part? Why?
When Benji had jam all over his face - messy like me


Submitted 13/01/2021, 10:56

1M	Rawan J	Rawan has impressed every single teacher in Year 1 by her dedication to her online learning. Everyday she works super hard to complete each lesson, always striving to complete her work to the best of her ability. We are all very proud Rawan, well done!
----	---------	--


✓ Tick all the human features. 1 / 1




school ✓



river

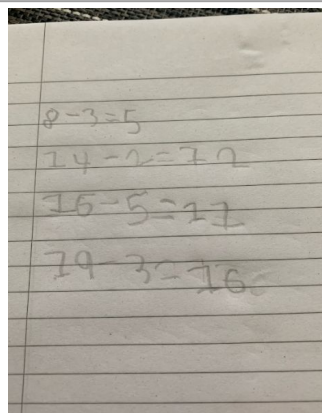


fire station ✓



supermarket ✓

1J	Muhammad H J	All week Hasaam has worked exceptionally hard to complete each lesson to a really high standard. He is always looking for new ways to challenge himself, such as completing extra maths challenges! Keep this up Hasaam - well done!
----	--------------	--





STARS OF THE WEEK

Class	Name	Reason
2H	Qayim J	Qayim completes his work every day with enthusiasm. We love reading his comments on the stream to his classmates. This week he completed a super piece of writing about a little boy who has an otter knock on his door one day!

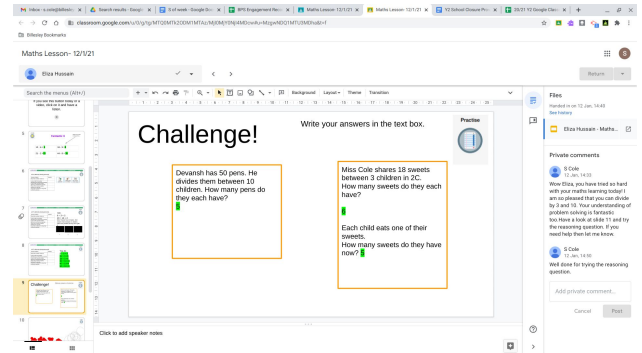
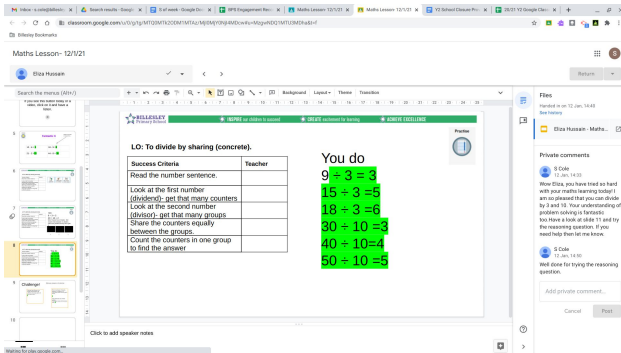
Lost and Found

Written and Illustrated by Qayim Jiwani


Once upon a time in a city called Ottawa, there was a boy named Otto who lived in a tree house. One sunny day, Otto heard a knock on his door. He opened the door nervously, and standing there was a poofy Giant Otter. The boy went quickly down the slide but the Otter had some trouble. The Giant Otter jumped off the slide and made it crack.

Otto needed to find a way to get the Giant Otter back home. He was reading a newspaper, and saw there was a ship in Ottawa called 'Otters Anywhere Everywhere.' He was so excited. Otto remembered that Giant Otters lived in the Amazon River in South America from when he did a school project.

2C	Eliza H	Eliza has been an absolute star on our Google Classroom this week and has tried hard to complete every piece of work every single day. She has persevered when completing some challenging maths work and has worked hard to solve tricky problems. Eliza also always reads her feedback from her teachers and then corrects and improves her work. Great job Eliza!
----	---------	--



2T	Mohammed M	Muneeb has logged on to google classrooms everyday and has done excellent work in every one of his lessons. He has also been logging on to the homework sites and has shown an excellent approach to his learning. Below is an example of his work. He had to design a vehicle and then make it and the design was fantastic! Everyone in year 2 is extremely proud of his work and the way he has applied himself. Keep up the good work Muneeb!
----	------------	---





STARS OF THE WEEK

Class	Name	Reason
3C	Ayaan Q	Ayaan has been brilliant on our Google Classroom. He tries every one of his lessons and has even given some helpful advice to others on the Stream. He was excellent at remembering what he learned about South America last week too. What a great role model you are Ayaan!

What can you remember from last week's lesson?
 Drag the ticks to the correct answers!



What is the largest mountain range in South America called?

The Andes

The Alps



What is this animal that can be found in South America called?

Goat

Alpaca

How many countries are in the continent of South America?

13

7



3M	Hannah L P	Hannah has been on Google Classroom everyday and we are very proud of her. We loved hearing that she had read interesting facts about Londonon Bug Club , and her writing planning was amazing. We know we can always count on Hannah to include something magical - even in report writing!
----	------------	--

My animal starts as a reindeer. It transforms when it's Christmas eve when santa needs them. The change is that they fly. Other details are one has a red nose to show the way.



3O	Dhiren Solanki	Well, what a fantastic start Dhiren has had to Spring Term! I am really missing his presence at school, but his presence at 'virtual school' is making a huge impact on his learning! He is getting stuck into every lesson set on Google Classroom, and checks for feedback daily too. This is such an important skill because it will enable you to keep getting cleverer and cleverer, Dhiren! I am really enjoying reading Dhiren's opinions on the lessons we have provided too- he's letting us know what he's enjoyed, and whether he was challenged! Keep going and I look forward to seeing you in real life very soon!
----	----------------	--

Check-in Welcome Activate Learn Practise Checkpoint Practise

NOW FOR THE MEGA CHALLENGE! 3 points for this!

TRUE OR FALSE?

To find the answer to 7×30 , first calculate 7×3 and then multiply the answer by 10.

$6 \times 5 < 60 \times 5$

$10 \times \dots = 30 \times 20$

Use paper and pen/ maths tools jamboard to help working!

TRUE OR FALSE?

Check-in Welcome Activate Learn Checkpoint Practise Reflect Review

Where am I in South America?

I do:

I am North of Argentina. I could be in... Bolivia.

You do:

I am South of Venezuela. I could be in... Brazil

I am East of Bolivia. I could be in... Brazil

I am West of Brazil. I could be in... Bolivia

I am South East of Bolivia. I could be in... Paraguay

I am North West of Paraguay. I could be in... Bolivia



STARS OF THE WEEK

Class	Name	Reason
4B	Zeina G	Zeina is completing all her work to a really high standard. She contributes on the stream and is really polite with any comments she gives. Well done Zeina!

Write your answer here.

Clint is incorrect he only did the ones column and he multiplied the tens column wrong $30 \times 3 = 90$. So the correct answer is 99 not 18.

He wrote the second multiplication under the first multiplication it has to be 99 not 99 and no need to add.

He has to write the second 9 in the tens column not in the second ones column.

$$\begin{array}{r} 33 \\ 3 \\ \hline 99 \end{array}$$



Clint has worked out the answer to a calculation.

10	10	1	1	1
10	10	1	1	1
10	10	1	1	1

	3	3
x		3
<hr/>		
		9
		9
	1	8

Is he correct? Explain your answer.

4J	Maysam A	Maysam has been such an active pupil on google classroom this week. She has demonstrated amazing dedication to completing her work to the best of her abilities. Her work ethic has meant that she has been able to produce a super report this week about a country of her choice. Miss Blythe now wants to go to Kenya because of how detailed it was! Well done Maysam.
----	----------	--

All About Kenya!

Kenya is a country located in East Africa and the capital of Kenya is Nairobi. The second highest mountain in Africa is also in Kenya and is known as Mount Kenya. Kenya has had the top tourist attractions for decades which includes national parks/ reserves, coastline beaches, trekking Mount Kenya, freshwater lakes and coral reefs.

How is the weather?

Kenya lies on the Equator, it has a pleasant tropical climate. Due to its closeness to the Equator, they don't experience a real winter or summer. The climate of Kenya also varies by location, from mostly cool every day, to always warm/hot. It is warmer in the coastal areas.

What animals live there?

The most popular animals in Kenya known as The Big Five are the Lion, Leopard, Elephant, Buffalo and Rhinoceros. Other animals who also live there are Crocodiles, Giraffes, Genets, Wildebeests, Hyenas and Cheetahs.

Did you know?

- Lamu Island, which is located off the northeast coast of Kenya is car-free.
- Kenya is also home to the fastest land animal known as the Cheetah.
- Kenya is the world's leading safari destination.

4L	Saira K	Saira has impressed me so much this week, not only has she completed all of the work she has been given on Google classroom to an amazing standard but she has also taken time to participate in the Year 4 creative competition. She has not only created one outstanding poster sharing a positive message she has designed 4 posters. This is a brilliant attitude to have towards your learning and I am so pleased.
----	---------	--





STARS OF THE WEEK

Class	Name	Reason
5C	Oliver S	Our star of the week this week Oliver. He has been online everyday and tried his very best at all of his work, sometimes getting full marks! Here is a picture of his history work where we have been discussing evacuees during world war 2. Oliver showed what he would put in his suitcase if he was an evacuee.

Evacuation

During the war, lots of children were evacuated to the country to help keep them safe, just like Michael Morpurgo and his brother were. They were only allowed to pack one suitcase to take with them.

Activity

Imagine you were being evacuated to the countryside, and you had to pack just one small suitcase with only 10 items. Below, show me what you would pack in your evacuation suitcase. To add items you can copy them from the internet and then paste them into the suitcase or you can type in the suitcase.

5S	Ayman A	Ayman has been fully engaged since Google Classroom started. All of his work is completed. He has used the feedback I have given him to edit and improve his work.
5M	Riley D	Riley is working so hard in all subjects on the Google Classroom and is handing in some excellent work. I am particularly impressed with his developing reasoning skills in maths.

Point A is marked on the grid with a circle.

Two children have written down the coordinates for Point A.

Henry 'Point A is at (5,8)'

Alisha 'Point A is at (8,5)'

Who is incorrect? What mistake have they made?

Henry is incorrect because you start at the bottom X and then up Y, not up then along.





STARS OF THE WEEK

Class	Name	Reason
6HB	Mason R	Mason has had an incredible start to google classroom! He is working so, so hard at every lesson and is showing bundles of enthusiasm. I was especially pleased with Mason's thoughtful science work, where he had to classify animals using some interesting grouping! We are all so proud and love chatting to Mason everyday! Keep it up!

Task 3

6B	Ellie-Mae W	Ellie-Mae has been working extremely hard on google classroom from the very beginning! She attempts all of her tasks and is active in her learning knowing when to ask for help to make sure she achieves the best she can! We are really proud of you Ellie-Mae especially when you work so hard on tricky maths questions!
----	-------------	--

All the Digits
Age 7 to 11

This represents the multiplication of a 4-figure number by 3.

The whole calculation uses each of the digits 0 – 9 once and once only.
The 4-figure number contains three consecutive numbers, which are not in order. The third digit is the sum of two of the consecutive numbers.
The first, third and fifth figures of the five-digit product are three consecutive numbers, again not in order. The second and fourth digits are also consecutive numbers.
Can you replace the stars in the calculation with figures?

6S	Riyaan M	It has been a pleasure to have Riyaan back with 6S (virtually!) this week! He has been engaged and worked hard in all subjects and has even been sharing lots of fun facts about Jupiter with us on the steam! I was particularly impressed with Riyaan's writing based on a magical map. He tried very hard to make sure he included interesting sentence openers as well as a truly entertaining story! Great job, Riyaan!
----	----------	--

Write your paragraph or paragraphs here. Remember, one sentence is not enough writing!
As the bright, yellow sun started to rise the family began to have their breakfast. When Tom sat down on the chair he accidentally spilt his mum's tea on the table. He started to feel nervous, just then he saw the spillage it was shaped as a world map. Slowly he touched Egypt, in a flash the atmosphere changed, rather than the whole family being around the dining table they were all in Cairo around the pyramids. His Mum shouted to him "Tom what have you done and how do we get back?"

I can correctly punctuate my fronted adverbials. (20pts)
I can use different types of fronted adverbials - time, place, manner, frequency, degree (20pts)
I can include show not tell (20pts)
I can use expanded noun phrases. (20pts)
Challenge: I can use powerful vocabulary. (20 pts)